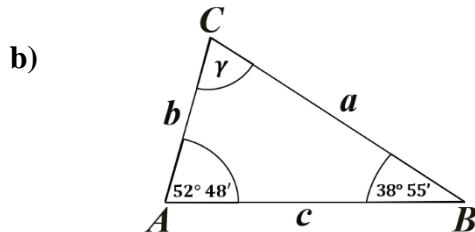
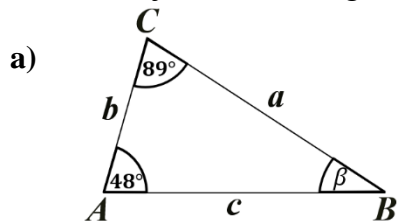
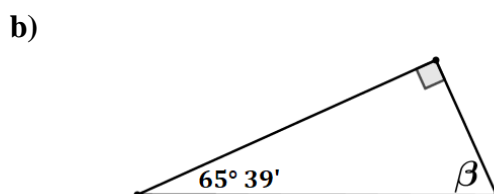
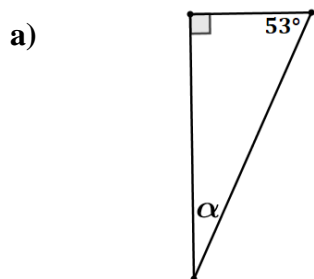


KUTOVI U TROKUTU

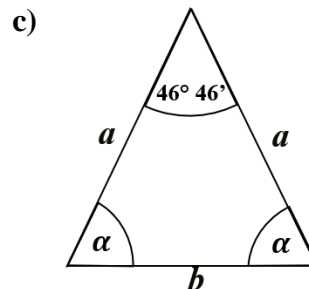
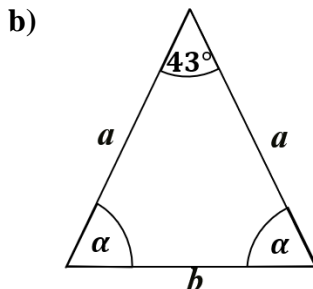
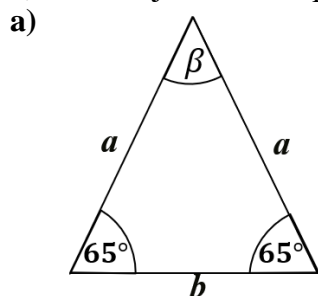
1) Izračunaj veličinu trećeg kuta:



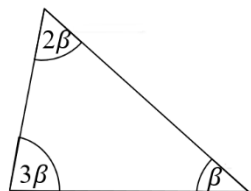
2) Izračunaj veličinu nepoznatog kuta:



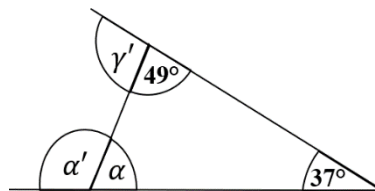
3) Izračunaj veličinu nepoznatog kuta:



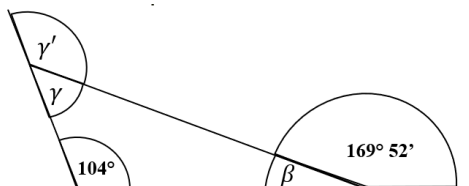
4) Izračunaj veličine kutova u trokutu.



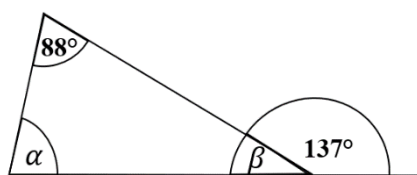
5) Izračunaj veličine kutova u trokutu.



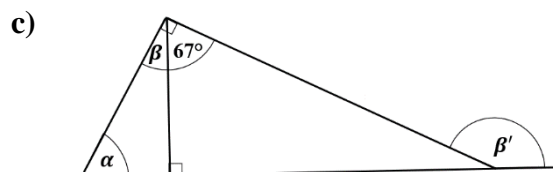
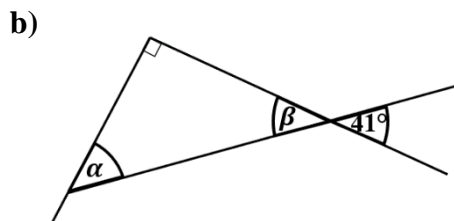
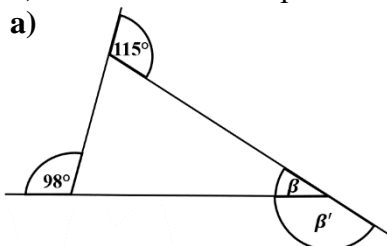
6) Odredi veličine nepoznatih kutova sa slike.



7) Izračunaj veličine kutova u trokutu.



8) Odredi veličine nepoznatih kutova sa slike:



9) U jednakokračnom trokutu ABC je veličina kuta nasuprot osnovice $\alpha = 48^\circ 36'$.
Izračunaj veličinu **kutova uz osnovicu** jednakokračnog trokuta. (skica!)